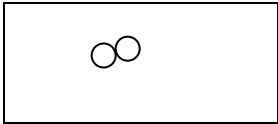
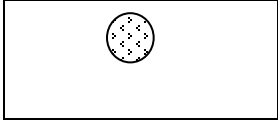
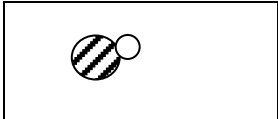
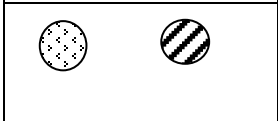
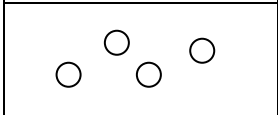


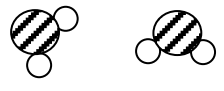
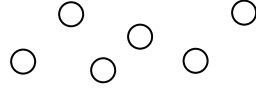


Elements, Mixtures and Compounds



A. Link each diagram with its description.

Diagram	Description
	<ul style="list-style-type: none">• Atom A single particle
	<ul style="list-style-type: none">• Molecule 1 particle made of 2 or more atoms
	<ul style="list-style-type: none">• Element A collection of atoms that are all the same
	<ul style="list-style-type: none">• Compound Two or more different elements joined together
	<ul style="list-style-type: none">• Mixture Different substances mixed together but not joined

B. Study the diagrams, and decide which each statement below is describing.

a 	b 	c 	d 
---	---	--	---

1. Atoms of an element ____
2. Molecules of an element ____
3. A mixture of 2 elements, both of which are made of atoms ____
4. A pure compound made of molecules ____